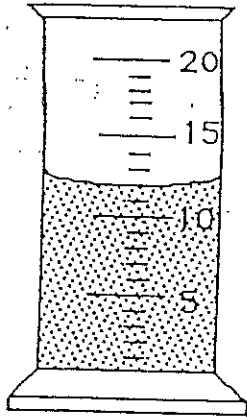


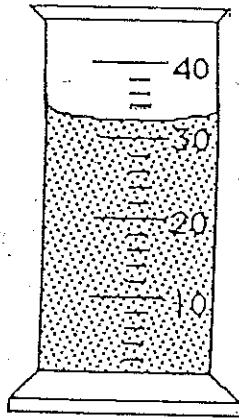
SCIENTIFIC MEASUREMENT

Reading Graduated Cylinders and Measuring Line Segments

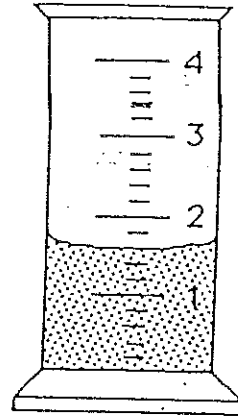
Read the meniscus line on these graduates.



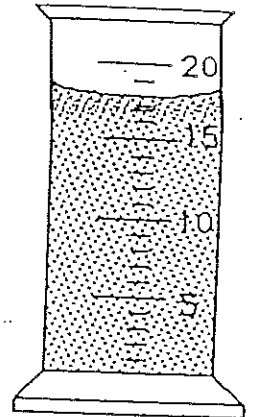
1. _____ ml



2. _____ ml

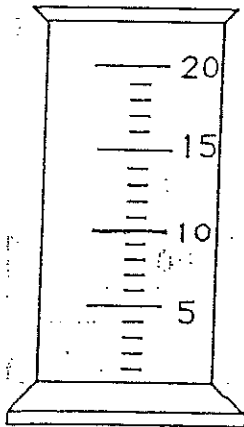


3. _____ ml




4. _____ ml

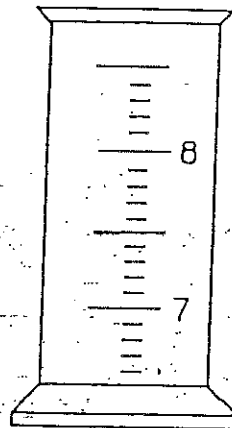
Draw a meniscus for each of the following graduates.



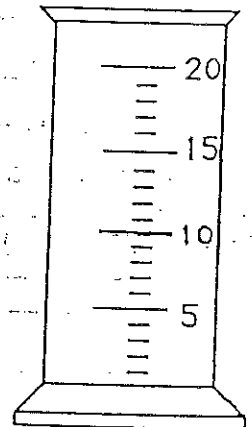
5. 14 ml



6. 22 ml



7. 7.6 ml



8. 12.5 ml

Measure the following line segments in centimeters.

9. _____

10. _____

11. _____

12. _____

13. _____