

Volume of Rectangular Prisms

Find the volume for each of the following

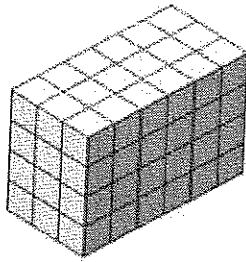


Figure 1

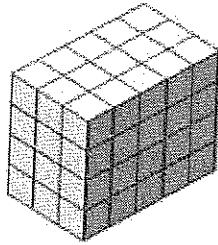


Figure 2

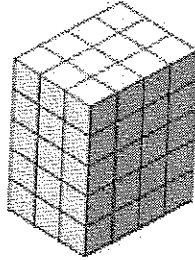


Figure 3

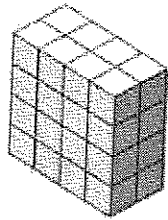



Figure 4

Key:  = 1 cubic unit

Show your work for each problem:

Figure 1:

Figure 2:

Figure 3:

Figure 4:

Volume of Rectangular Prisms

Find the volume for each of the following

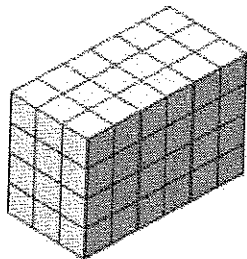


Figure 1

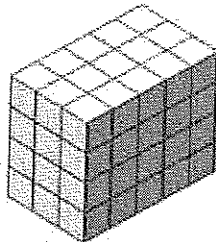


Figure 2

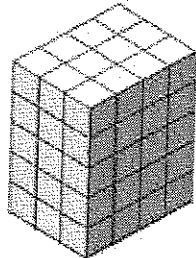


Figure 3

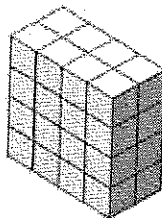


Figure 4

Key:  = 1 cubic unit

Show your work for each problem:

Figure 1:

Figure 2:

Figure 3:

Figure 4: